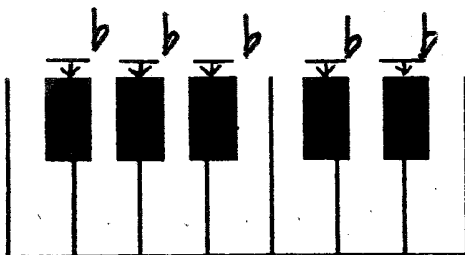


Arkansas State Music Teachers Association
Written Theory Test
Primary B

Student No. _____

Score _____

1. Write the letter name of the FLAT black keys shown by the arrows. (5)



2. Write the letters of the musical alphabet going UP and back DOWN one time by step. Do not repeat the 7th letter. (11)

A _ _ _ _ _ _ _ _ _ _ A

3. Write the letter name of each note on the line beneath it. (10)



_ _ _ _ _ _ _ _ _ _ _

4. The two notes in each measure move as a 2nd (Step) or 3rd (Skip). Circle 2nd or 3rd below each measure. (10)



2nd 2nd 2nd 2nd 2nd
 3rd 3rd 3rd 3rd 3rd

5. Write the letter name of these five-finger patterns (pentascales) on the blank line. LOOK AT THE CLEF SIGN! (4)



_____ Major

_____ Major

6. Write the letter name of these triads (chords) on the blank line. LOOK AT THE CLEF SIGN! (4)




_____ Major

_____ Major

7. Write the number of beats each note or rest gets in 4/4 time. (8)

 = _____ beats

 = _____ beats

 = _____ beats

 = _____ beats

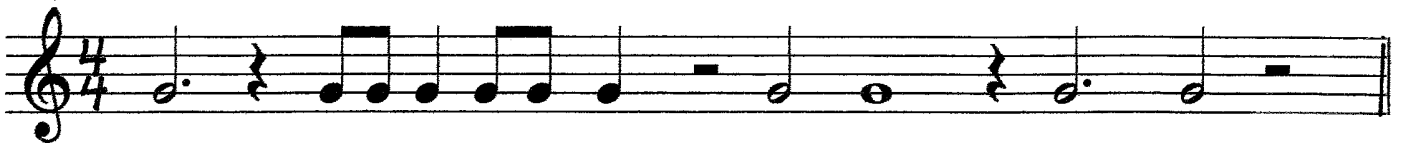
 = _____ beats

 = _____ beats

 = _____ beats

 = _____ beats

8. Draw barlines where they are needed. LOOK AT THE TIME SIGNATURE! (9)




Primary B – page 3

9. Add the ONE missing NOTE in each measure. LOOK AT THE TIME SIGNATURE! (10)



10. Write the letter names of the notes on the lines below each staff. LOOK AT THE CLEF SIGNS!





11. The FIRST and main note of a key is called: (Circle the answer.) (2)

Harmonic or Melodic or Tonic

12. Circle the correct sign for each musical term.

(12)

A. Sharp

\flat \sharp \natural

B. Fermata

$>$ f \frown

C. Flat

\flat \sharp \natural

D. Moderately loud

mp f mf

E. Natural

\flat \sharp \natural

F. Loud

p f mf

G. Time signature

\sphericalangle \downarrow $\frac{3}{4}$

H. The end

\frown Fine $\frac{2}{4}$

I. Moderately soft

p mp mf

J. Crescendo

\sphericalangle \sphericalangle D.C.

K. Diminuendo

\sphericalangle \sphericalangle Fine

L. Soft

f mf p

BONUS QUESTION

(5)

Name two early keyboard (clavier) instruments:
