

Theory Level 9 - Triad Identification

On the blank lines, write the root of each triad and circle whether the triad is Major or minor.



Major

minor




Major

minor



Major

minor



Major

minor




Major

minor




Major

minor




Major

minor




Major

minor



Major

minor



Major

minor




Major

minor



Major

minor



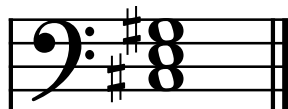
Major

minor



Major

minor



Major

minor



Major

minor

Theory Level 9 - Terms and Definitions

Fill in each blank with the correct word from the word list.

Word List

a cappella
alberti bass
arpeggio
alla breve

assai
calando
chord quality
con fuoco

deceptive cadence
half cadence
diminished intervals
diminished triad

l'istesso tempo
largo
scherzando
Trill

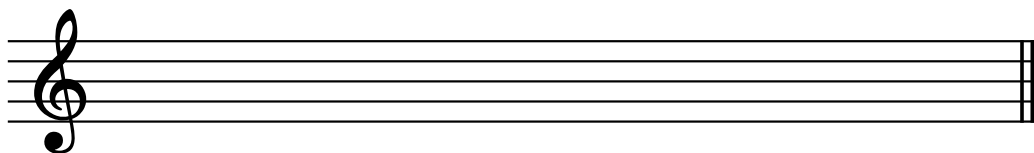
- _____ Playing notes of a chord consecutively in a harp-like manner
- _____ An accompaniment pattern using a broken three-note chord played bottom-top-middle-top
- _____ When the dominant chord (V) resolves to a chord other than the tonic (I), usually V-vi or V-VI
- _____ Unaccompanied
- _____ Alternation of two notes a second apart
- _____ Playful
- _____ Is determined by the intervals between the notes in a chord
- _____ A minor triad with the fifth lowered one half step
- _____ Time signature indicating two beats to the measure with a half note receiving one beat
- _____ Becoming softer and slower
- _____ Very
- _____ Perfect or minor intervals decreased by a half step
- _____ Very slow
- _____ The same tempo
- _____ Any cadence which ends on V
- _____ With fire

Theory Level 9 - New Scale Practice


C-sharp, C-flat Major and a-sharp, a-flat minor

Draw the scales one octave ascending and descending. Use whole notes. Use accidentals as needed. Do not use a key signature.


a-sharp
natural minor




a-flat harmonic minor



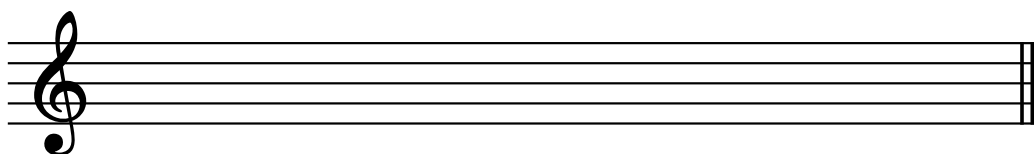
a-sharp
melodic minor




a-flat natural minor



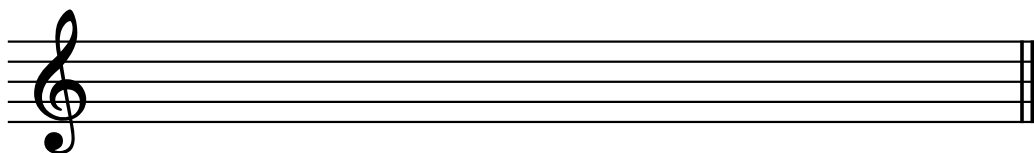
a-sharp
harmonic minor




a-flat melodic minor



C-flat Major

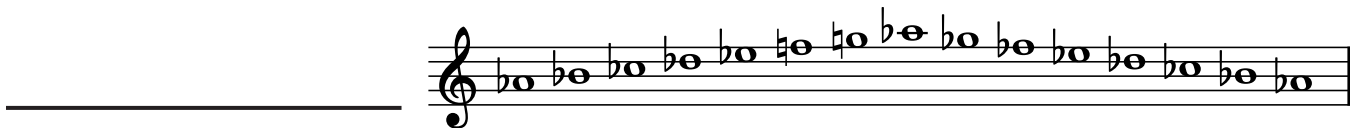


C-sharp Major



Theory Level 9 - Scale Identification

Write the name of each scale. Include Major, natural minor, harmonic minor, or melodic minor in your answer.



Theory Level 9 - Music Symbol Drawing

Draw the correct music symbol in each box.

Trill

Ad libitum

Portato

Sforzando

Double sharp

Dotted eighth rest

Thirty-second rest

Dotted sixteenth rest

Double-dotted quarter rest

Tre corde

Augmented chord symbol

Two sixteenth notes beamed

Dotted sixteenth note

Thirty-second note

Quarter-note triplet

Accent

Opus


Glissando

Diminished chord symbol

Tenuto

Theory Level 9 - Key Signature Writing


Draw the correct key signature for each Major or minor key.



C-flat Major




G-flat Major




F-sharp Major




c-sharp minor



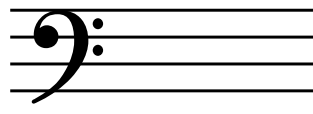
B Major




D-flat Major



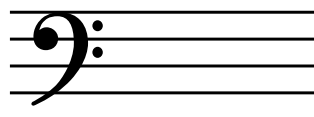
E Major



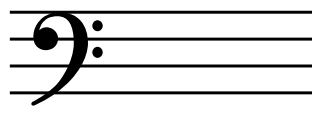
g-sharp minor



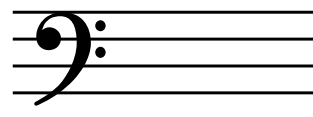
b-flat minor



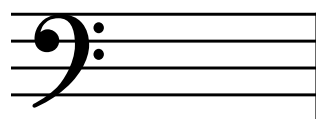
f minor



C-sharp Major



e-flat minor




a-sharp minor



A-flat Major




a-flat minor



d-sharp minor

Theory Level 9 - Key Signature Identification

Write the name of the Major or minor key shown by each key signature.



_____ minor




_____ minor



_____ minor



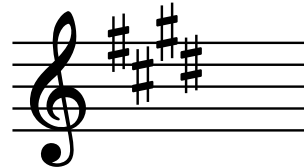
_____ Major



_____ Major




_____ Major



_____ minor



_____ minor



_____ minor




_____ minor



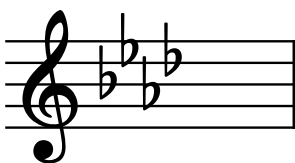
_____ Major



_____ Major



_____ minor



_____ Major



_____ Major



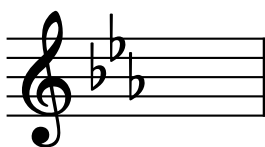
_____ Major

Theory Level 9 - Key Signature Identification Review

Write the name of the Major or minor key shown by each key signature.



_____ Major




_____ minor



_____ Major



_____ Major



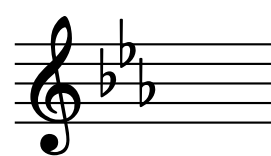
_____ Major



_____ minor




_____ minor



_____ Major



_____ minor



_____ Major



_____ minor



_____ minor



_____ Major



_____ minor



_____ minor



_____ Major